

Name _____


Teacher _____

Score _____


1. KEY SIGNATURES: Circle the correct answer for each key signature.



G Major.....D Major.....A Major



Eb Major..... Bb MinorF Minor




E Minor..... F# Minor..... D Major




F Major..... Eb Major..... G Minor

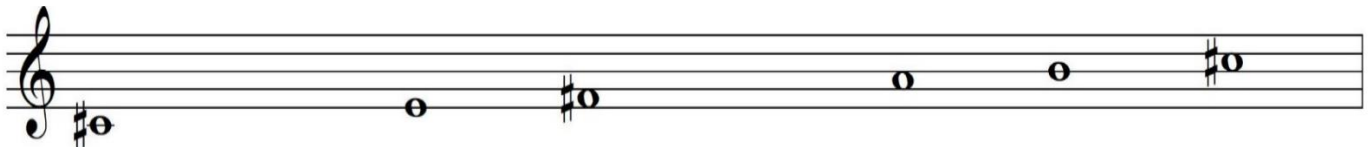
2. Scales: Write the missing notes in each scale.



D Natural Minor




F# Natural Minor



C# Natural Minor

3. CHORDS: Circle the correct name (Major or Minor) for each chord.



Major
Minor



Major
Minor



Major
Minor



Major
Minor



Major
Minor

4. INTERVALS: Circle the correct name for each interval.




melodic 5th
harmonic 5th
harmonic 6th



melodic 2nd
harmonic 2nd
melodic 3rd



harmonic 7th
melodic 7th
melodic 6th



harmonic 6th
harmonic 5th
melodic 6th



melodic 4th
melodic 3rd
harmonic 3rd

