

Name \_\_\_\_\_


Teacher \_\_\_\_\_

Score \_\_\_\_\_


**1. KEY SIGNATURES: Circle the correct answer for each key signature.**



F Major Bb Major G Major




F Major D Major Bb Major





D Major F Major C Major

**2. NOTES: Circle the correct answer for each note.**




B	B	G	D	B	E	F	B	F	D
D	D	D	B	D	C	A	G	A	G
F	G	E	F	F	G	D	E	C	E

**3. Identify 5-finger patterns as major or minor. Example: C Major**



**4. Identify harmonic and melodic intervals. Ex: Mel. 3rd or Har. 2nd**



\_\_\_\_\_

\_\_\_\_\_

\_\_\_\_\_

\_\_\_\_\_

\_\_\_\_\_

